



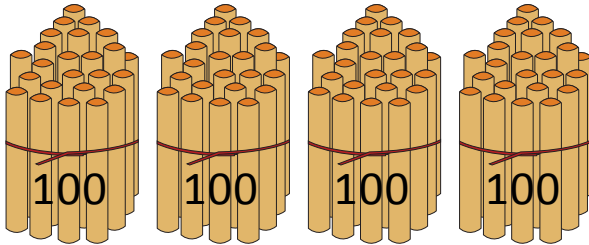
NAME _____ DATE _____

BUNDLE AND COUNT

Count each group. What is the total number of pictures in each group.

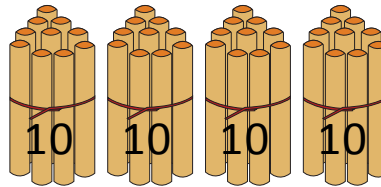
Example:

Bundles of 100



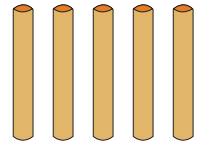
400

Bundles of 10



40

Ones



5

Total number of sticks = 445.

1)

Bundles of 100



Bundles of 10




Ones



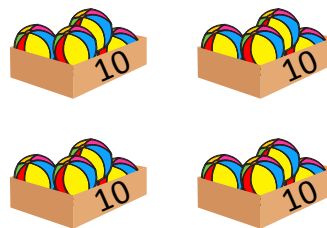
Total number of marbles = _____.

2)


Bundles of 100



Bundles of 10



Ones



Total number of balls = _____.